

Name _____

Week 1, Monday

Reading Log


Title	Time	Parent Initials

Math (Please show your work.)

Ari has 30 ladybugs, she sees 12 more. How many ladybugs does she see in all?	Tomas read 5 books about ninjas. He is planning to check out 15 more from the library. How many ninja books will he have in all?	Miss Hughes has 30 cookies. She gives away 20 cookies to hungry students. How many cookies does she have left?	Fill in the missing numbers: 10, 20, _____, 40, _____	Count back: 100, 99, 98, _____, 96, _____, _____, 93 , 92, _____, 90
$17+4=$ _____	$20+20=$ _____	$70-40=$ _____	$10+ \text{_____} = 20$	$25+ 5+ 5=$ _____

Writing (Please write at least 4 complete sentences. There are extra lines on the back of this page.)

Who will you pray for today? How can you serve them or show them you care?





Name _____

Week 1, Tuesday

Reading Log


Title	Time	Parent Initials

Math (Please show your work.)

$14+10=$ _____	$90-70=$ _____	I am a number between 27 and 30. I am larger than 28. Which number am I? _____ _____	Skip count by 5s to 100. Write the next three numbers by fives. 100, _____, _____, _____, 120	If you take 20 away from 50, you will find me! I am a two digit number that starts with a 3! Which number am I?
Write these numbers as tally marks: 25: 17: 2:	Compare these numbers: <, >, = 102 200 37 30 14 41 0 0	 Divide this shape into halves. Which shape is this? _____ How many halves are there? _____	 How many sides does this shape have? _____ How many vertices? _____	Pick your favorite two-dimensional shape and draw it here:

Writing (Please write at least 4 complete sentences. There are extra lines on the back of this page.)

If you could go anywhere in the world, where would it be? Which map would you use to get there?



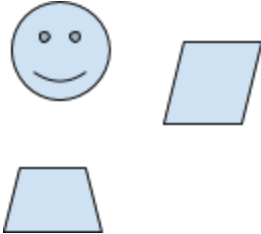
Name _____

Week 1, Wednesday

Reading Log


Title	Time	Parent Initials

Math (Please show your work.)

<p>I see 25 students on the playground. 10 went inside the school. How many are left on the playground?</p>	<p>Bella has a large chocolate cake. It is shaped like a rectangle. She wants to share it with 3 friends. How many equal parts does she need? (Helpful hint: Draw the shape)</p> <p>_____ equal parts</p>	<p>I am a shape with 3 sides and 3 vertices. Which shape am I?</p> <p>_____</p> <p>Can I be a rectangle?</p> <p>_____</p> <p>Can I be a circle?</p> <p>_____</p>	<p>Use <u>at least two</u> of these shapes to make a picture:</p> 	<p>Skip count by 2s to 100. If you can go past 100, challenge yourself to try!</p> <p>I can skip count by 2s to _____</p>
$13+7=$ _____	$10+9=$ _____	$12-4=$ _____	$10+60=$ _____	$50+50=$ _____

Writing (Please write at least 4 complete sentences. There are extra lines on the back of this page.)

If you could have any animal as a pet, what would it be? Why? What would you need for it to be healthy?



Name _____

Week 1, Thursday

Reading Log


Title	Time	Parent Initials

Math (Please show your work.)

Jonathan see 14 crabs at the beach on the sand. 5 crawl into the ocean. How many crabs are left on the sand?	Linnea plays the violin 5 days in a row. The next week, she play violin for 7 days in a row. How many days did she play altogether?	I spy a shape. It has 4 sides. It has two sides that are diagonal and the last two sides are straight, but are not the same length. What shape do I see? _____ _____ _____	Find two objects. Draw them, label them, and circle which one is longer.	I have one giant cookie. I have one friend I want to share it with. How many equal parts will I need? Draw the cookie.
100+100= _____	8+2+5= _____	4+6+7= _____	10-3= _____	14+9= _____

Writing (Please write at least 4 complete sentences. There are extra lines on the back of this page). Please write a response for each question.

Who is one character in a book you are reading? Who is another? How are they alike? How are they different?



Name _____

Week 1, Friday

Reading Log

Title	Time	Parent Initials

Math (Please show your work.)

$12+12=$ _____	$70-10=$ _____	$100+20=$ _____	In the number 101, there are: _____ hundreds _____ tens _____ ones	Write a number that is <u>ten more</u> : 10 _____ 90 _____ 101 _____
Count down (back) from 30. When you get to 0, say "Blast off!"	$12+ 2+ 8=$ _____	$40+50+10=$ _____	Find 5 objects. Sort them shape. Then sort them a different way. How did you sort them? _____ _____	Write the number that is <u>10 less</u> . 100 _____ 35 _____ 27 _____ 10 _____

Writing (Please write at least 4 complete sentences. There are extra lines on the back of this page.)

Write one goal for yourself (personal or for next year in school). How will you work toward this goal?



Name _____

Week 2, Monday

Reading Log


Title	Time	Parent Initials

Math (Please show your work.)

Draw these numbers as groups of tens and ones: 47	Draw these numbers as groups of tens and ones: 59	Draw these numbers as groups of tens and ones: 100	Draw these numbers as groups of tens and ones: 29	Draw these numbers as groups of tens and ones: 38
--	--	---	--	--

Writing (Please write at least 4 complete sentences. There are extra lines on the back of this page.)

If you attended Church this week, what is something that you learned? If you did not go to the Church, who would you like to pray for?



Name _____

Week 2, Tuesday

Reading Log


Title	Time	Parent Initials

Math (Please show your work.)

<p>I have 20 marbles. 10 are red, 5 are black, and some are blue. How many are blue?</p>	<p>Alexis has a garden. She has 24 sunflower. She plants 20 more sunflowers. How many sunflowers does she have altogether?</p>	<p>The answer to an addition problem is called a _____.</p> <p>The answer to a subtraction problem is called the _____.</p>	<p>The current month is _____.</p> <p>There are _____ weekends.</p> <p>There are _____ weekdays.</p>	<p>Ariana has 25 troll dolls. She gives one to each of her 10 friends. How many troll dolls does she have left?</p>
--	--	---	--	---

Writing (Please write at least 4 complete sentences. There are extra lines on the back of this page.)

How have you been a good helper at home? What would you like to help with next?




Name _____

Week 2, Wednesday

Reading Log


Title	Time	Parent Initials

Math (Please show work.)

 <p>What are the names of these three dimensional shapes?</p> <p>_____</p> <p>_____</p> <p>_____</p>	<p>What time is it right now?</p> <p>_____</p> <p>What time will it be in one hour?</p> <p>_____</p>	<p>Look at the book you are reading. What page number are you on?</p> <p>_____</p> <p>If there were 100 more pages in your book, which page would you be on?</p> <p>_____</p>	<p>Malcolm has 12 doughnuts. He shares them with 3 students. How many doughnuts will each student get?</p>	<p>Write down your schedule from the time you wake up to the time you eat lunch. You can write it by the hour or half hour.</p>
---	--	---	--	---

Writing (Please write at least 4 complete sentences. There are extra lines on the back of this page.)

Go on a walk with your family. Write about what you saw. Which senses did you use? What was the weather like?




Name _____

Week 2, Thursday

Reading Log


Title	Time	Parent Initials

Math (Please show your work.)

$20+30=$ _____	$60-20=$ _____	It is 9:30. In two hours, I have to eat lunch. What time will I need to each lunch? _____	What are the numbers in your address? (Ex: 102) Add the three single digit numbers together. What is the sum? _____ For an extra challenge, try the zip code	Finish these patterns: 2 2 1 2 2 1 _ _ 1 
----------------	----------------	--	--	--

Writing (Please write at least 4 complete sentences. There are extra lines on the back of this page.)

Which book are you reading? Where does it take place/what is the setting? How are you enjoying the book so far.



Name _____

Week 2, Friday

Reading Log


Title	Time	Parent Initials

Math (Please show your work.)

How many letters are in your first name? _____	How many letters are in your middle name? _____	How many letters are in your last name? _____	Add the total from your first name, middle name, and last name together. What is your sum? _____	Which of your names is the longest? _____ Subtract one of your shorter names from your longer name. _____
20+20+10= _____	Find the longest word in your book. How many letters are there? _____	Find the shortest word in your book. How many letters are there? _____	What is the difference between the longest word and shortest word? _____	Free space!

Writing (Please write at least 4 complete sentences. There are extra lines on the back of this page.)

Look back at your Week 1 Friday writing. Are you making progress toward your goal? Did you accomplish your goal? If so, set a new goal and a new plan.



Name _____

Week 3, Monday

Reading Log


Title	Time	Parent Initials

Math (Please show your work.)

<p>Betania has 11 toy cars. Her friend gives her 20 more. How many toy cars does she have in all?</p> <p>_____</p>	<p>I am a three dimensional shape. I have 6 faces and 8 vertices. All of my faces look like squares. Which shape am I?</p> <p>_____</p> <p>For an extra challenge, try to draw it!</p>	<p>$9 + 8 =$ _____</p> <p>$4 + 7 =$ _____</p> <p>$13 + 9 =$ _____</p>	<p>Write the matching number sentence. Twelve students are on the playground. Five students leave the playground. How many students are left on the playground?</p> <p>_____</p>	<p>Skip count by 5s to 100, while skipping!</p>
--	--	--	--	---

Writing (Please write at least 4 complete sentences. There are extra lines on the back of this page.)

Do you know someone who has been sick? Write a prayer for them. If you have been sick, write a prayer for yourself.



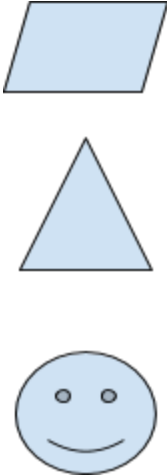
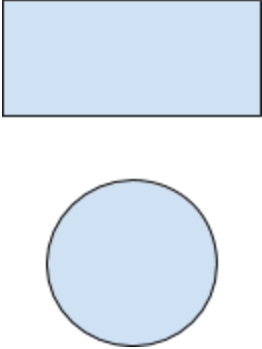
Name _____

Week 3, Tuesday

Reading Log


Title	Time	Parent Initials

Math (Please show your work.)

<p>Khimya and 3 friends all put their hands in a circle for a picture. How many fingers were in the picture?</p> <p>_____</p>	<p>How many days are in this month?</p> <p>_____</p> <p>How many days were in last month?</p> <p>_____</p>	<p>See the previous question(s). Subtract the number with the fewer number of days from the number with the greater number of days. Find the difference.</p> <p>_____</p>	<p>Divide these shapes into halves:</p> 	<p>Divide these shapes into quarters:</p> 
$19 + 7 = \underline{\quad}$	$12 + \underline{\quad} = 17$	$20 - 15 = \underline{\quad}$	$10 + 3 + 7 = \underline{\quad}$	$10 - 2 = 8$ Write a related addition fact:

Writing (Please write at least 4 complete sentences. There are extra lines on the back of this page.)

Think of something you would like to do in the future- 2nd grade! What is it and why?



Name _____

Week 3, Wednesday

Reading Log


Title	Time	Parent Initials

Math (Please show your work.)

<p>Alexandre read 10 books about robots, 9 books about superheroes, and 2 books about presidents. How many books did he read in all?</p> <p>_____</p>	<p>Get a coin and toss it 10 times. Record your data.</p> <p>_____ heads</p> <p>_____ tails</p>	<p>Draw your coin.</p> <p>How much is it worth?</p> <p>_____</p>	<p>If I wanted to trade you a dollar for your coin, how many of your coins would I need?</p> <p>_____</p>	<p>Look! Linnea spotted a creature with 2 circles for eyes, a rhombus for a nose, and 6 rectangles for teeth. Draw what the creature looks like!</p>
---	---	--	---	--

Writing (Please write at least 4 complete sentences. There are extra lines on the back of this page.)

What is the weather like today? Does it feel comfortable to you? What is your ideal weather?





Name _____

Week 3, Friday

Reading Log


Title	Time	Parent Initials

Math (Please show your work.)

<p>Find one thing in your house that is shaped like a cylinder. What is it?</p> <p>_____</p> <p>_____</p> <p>Draw it!</p>	<p>Draw a small map of your living room. Label the shapes you used!</p>	<p>See how quickly you can solve these problems:</p> <p>$99+2 = \underline{\hspace{2cm}}$</p> <p>$40+40= \underline{\hspace{2cm}}$</p> <p>$10+2+5= \underline{\hspace{2cm}}$</p> <p>$19-4= \underline{\hspace{2cm}}$</p> <p>Circle any that were tricky to solve.</p>	<p>Draw this numbers as tens and ones:</p> <p>22</p>	<p>Draw these numbers as tens and ones:</p> <p>101</p>
---	---	---	--	--

Writing (Please write at least 4 complete sentences. There are extra lines on the back of this page.)

Look at your goal or goals from the last two weeks. Have you made any progress toward them? What would you like to do differently? What did you do that was successful?



Name _____

Week 4, Monday

Reading Log

Title	Time	Parent Initials

Math (Please show your work.)

Elisa is walking with her mom, her brother, her sister, and her dad. How many feet are walking altogether? _____	Which day of the week is your favorite? _____ How many times does it show up on the calendar this month? _____	What is your favorite number? _____ Show in tally marks:	Add: 10+14= _____ 20+ 9= _____ 10+ _____ = 17	Subtract: 40-30= _____ 20-20= _____ 30- _____ = 10
---	---	--	--	---

Writing (Please write at least 4 complete sentences. There extra lines on the back of this page.)

Write intentions that you have for others. They can be all for one person, or for multiple people. Today, think about lifting up others through prayer.



Name _____

Week 4, Tuesday

Reading Log


Title	Time	Parent Initials

Math

Practice for 15 minutes in i-Ready or IXL.

Writing (Please write at least 4 complete sentences. There are extra lines on the back of this page.)

Think about someone who is/was very important in your life. Who are/were they? Why are/were they so special to you?



Name _____

Week 4, Wednesday

Reading Log


Title	Time	Parent Initials

Math

Practice for 15 minutes in i-Ready or IXL

Writing (Please write at least 4 complete sentences. There are extra lines on the back of this page.)

Find a plant that is growing near/in your house or neighborhood. Describe what you see. Please use caution about touching unknown plants.



Name _____

Week 4, Thursday

Reading Log


Title	Time	Parent Initials

Math (Please show your work)

<p>Write your own problem to go with this number sentence:</p> <p>$10+30=$ _____</p> <p>_____</p> <p>_____</p> <p>_____</p>	<p>Write your own problem to go with this number sentence:</p> <p>$25-7=$ _____</p> <p>_____</p> <p>_____</p> <p>_____</p>
--	---

Writing (Please write at least 4 complete sentences. There are extra lines on the back of this page.)

Write a note to the author of a book you have read. What did you love? What did you not love? What do you wish you knew more about?



Name _____

Week 4, Friday

Reading Log


Title	Time	Parent Initials

Math

<p>Go outside. Find something that is shaped like a rectangular prism. What is it?</p> <p>_____</p> <p>_____</p>	<p>Pick up two leaves. Compare them. Which one is shorter?</p> <p>_____</p> <p>Draw it</p>	<p>How many steps does it take to walk around your living room?</p> <p>_____</p>	<p>How many hops does it take to go from the kitchen to your bedroom?</p> <p>_____</p>	<p>Treat yourself to a skip counting video on YouTube (practice by 2s or 5s). Make sure an adult helps you find it!</p>
--	--	--	--	---

Writing (Please write at least 4 complete sentences. There are extra lines on the back of this page.)

Look back at your previous goals. Set a new goal if you have achieved one or more of them. Write it down here and on another paper and place it somewhere you will see it every day. Goals take practice. Keep practicing! Make your plan. How will you reach it?



Name _____

Week 5, Monday

Reading Log


Title	Time	Parent Initials

Math (Please show your work.)

<p>Count how many teeth you have. Subtract any that you have lost.</p> <p>_____</p>	<p>$40+50=$ _____</p>	<p>Jonathan collects 5 sea stars at the beach. How many sea star legs does he see altogether?</p>	<p>Chloe draws 6 characters. Each has 2 eyes. How many beautiful eyes does she draw?</p>	<p>Ben writes 10 pages of a story. The next day, he writes another 10 pages. On the third day, he writes 7 pages. How many pages does he write in all?</p>
---	----------------------------------	---	--	--

Writing (Please write at least 4 complete sentences. There are extra lines on the back of this page.)

Write a note to yourself about Faith. What would you like to know more about? What do you feel confident about?



Name _____

Week 5, Tuesday

Reading Log


Title	Time	Parent Initials

Math (Please show your work.)

Count by 5s to 100 while doing jumping jacks!	How many pencils does it take to measure a table in your house/apartment? _____	Alexandre brought 10 cupcakes to class. Each cupcake had 2 candles. How many candles did he bring? _____	Add up the numbers in your telephone number. What is your sum? _____	110-10= _____
12+9= _____	10+9+2= _____	14+ _____ = 20	10+ 70= _____	80-60= _____

Writing (Please write at least 4 complete sentences. There are extra lines on the back of this page.)

Think of a classmate that you miss. Write them a friendly letter. Don't forget to start with a greeting and end with a signature. Tell them what you love about them.



Name _____

Week 5, Wednesday

Reading Log


Title	Time	Parent Initials

Math

Practice for 15 minutes on i-Ready or IXL

Writing (Please write at least 4 complete sentences. There are extra lines on the back of this page.)

What can you do to help use Earth's resources wisely? If you know you can improve, what steps can you take? Who can help you? Who can you help?



Name _____

Week 5, Thursday

Reading Log


Title	Time	Parent Initials

Math (Please show your work.)

Draw to solve: 2 tens= _____	Draw to solve: 5 tens, 7 ones= _____	Draw to solve: 3 tens, 4 ones + 1 ten, 5 ones= _____	Draw to solve: 2 tens- 1 ten= _____	Make up your own addition or subtraction problem using groups of tens/ones. Draw to solve: _____ _____
--	--	---	---	---

Writing (Please write at least 4 complete sentences. There are extra lines on the back of this page.)

Write about a main event in a book you are reading. Did it change the story? Did it add to the story? Did it surprise you or did you see it coming?



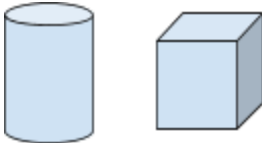
Name _____

Week 5, Friday

Reading Log


Title	Time	Parent Initials

Math (Please show your work.)

<p>Malcolm saw 5 pugs at the dog park. How many pug legs did he see?</p> <p>_____</p> <p>How many tails?</p> <p>_____</p>	<p>Elisa has 50 pencils. She gives away 30 pencils. How many pencils does she have left?</p> <p>_____</p>	<p>Are these two-dimensional or three-dimensional shapes?</p> <p></p> <p>_____</p> <p>_____</p>	<p>Make up a silly song or story about your favorite two-dimensional shape.</p>	<p>Jog for 2 minutes. Walk for 5 minutes. Free choice movement for 3 minutes. How many minutes did you exercise?</p> <p>_____</p>
<p>$20+20+10=$ _____</p>	<p>$110-100=$ _____</p>	<p>$10+4+4=$ _____</p>	<p>$5+ \text{ ______ } = 13$</p>	<p>$8- \text{ ______ } = 3$</p>

Writing (Please write at least 4 complete sentences. There are extra lines on the back of this page.)

How are you making progress toward reaching your goals? Can anyone help you reach them? Who? How can they help?



Name _____

Week 6, Monday

Reading Log


Title	Time	Parent Initials

Math (Please show your work.)

<p>Help your family with the laundry. Match all the socks. How many socks did you have altogether? Show with tally marks.</p> <p>_____</p>	<p>Betania baked 3 loaves of bread. She cut each loaf into 10 slices. How many slices of bread does she have altogether?</p> <p>_____</p>	<p>Walk from your bedroom to the bathroom 3 times. How many steps did you take?</p> <p>_____</p>	<p>Help with the dishes for 10 minutes. Help clean up for 5 minutes. Hug a family member and give them a compliment for 3 minutes. How many minutes did you spend giving to others?</p> <p>_____</p>	<p>Linnea went to the swimming pool at 12:00. She swam for one hour and a half. What time did she leave the swimming pool?</p> <p>_____</p>
--	---	--	--	---

Writing (Please write at least 4 complete sentences. There are extra lines on the back of this page.)

Think of someone who would make a great saint. Describe what they do that is so great. If possible, share this with them. Don't forget to write down an intention for them.



Name _____

Week 6, Tuesday

Reading Log


Title	Time	Parent Initials

Math

Practice IXL or i-Ready for 15 minutes.

Writing (Please write at least 4 complete sentences. There are extra lines on the back of this page.)

What are two main rules in your house/family? Why are they important? What happens if they get broken? How can you help follow these rules?



Name _____

Week 6, Wednesday

Reading Log


Title	Time	Parent Initials

Math (Please show your work.)

<p>Write your own math problem to go with this number sentence:</p> <p>$20 + 30 = \underline{\hspace{2cm}}$</p> <hr/> <hr/> <hr/> <hr/> <hr/> <hr/> <hr/> <hr/>	<p>Write your own math problem to go with this number sentence:</p> <p>$5 + 10 + 8 = \underline{\hspace{2cm}}$</p> <hr/> <hr/> <hr/> <hr/> <hr/> <hr/> <hr/> <hr/>
--	---

Writing (Please write at least 4 complete sentences. There are extra lines on the back of this page.)

Jackpot! It is a free write day! Pick any school-appropriate topic and write about it.



Name _____

Week 6, Thursday

Reading Log

Title	Time	Parent Initials

Math (Please show your work.)

10+ 4+6= _____	Put your pointer finger on the inside of your wrist. Count how many times your heart beats in 1 minute. _____	Count back from 40. Don't forget to say, "Blast off" when you get to 0!	Skip count by 10s while skipping outside. Need a greater challenge? Try counting backwards from 100 to 0.	Alexis has 17 pieces of candy. She gives away 16 pieces. How many pieces does she have left? _____
15-9= _____	20-10= _____	Write a related subtraction fact: 10+20=30 ____ - ____ = ____	Write as tally marks: 39	Write as ones and tens: 39

Writing (Please write at least 4 complete sentences. There are extra lines on the back of this page.)

Write a letter to your favorite author. Tell them about how much you loved their book. You could even include some endangered animal facts to impress them!



Name _____

Week 6, Friday

Reading Log


Title	Time	Parent Initials

Math (Please show your work.)

Start at 7 and skip count by 10's until you reach 107.	Figure out how old you will be 4 summers from now. _____ _____ _____	List as many subtraction equations you can that have an answer of 1.	Solve the equation and write a word problem to match. $3 + 12 + 3 = \underline{\quad}$ _____ _____ _____ _____
--	---	--	---

Writing (Please write at least 4 complete sentences. There are extra lines on the back of this page.)

What has been challenging for you when setting your goals? What has been easy for you? How are you making progress toward your goals?



Name _____

Week 7, Monday

Reading Log


Title	Time	Parent Initials

Math

Skip Count by 2's in the morning, 5's in the afternoon, and 10's at night.	Count the change in a family member's wallet. Sort the coins. Record the amount. _____	Write and solve a story problem using the names in your family. (Addition or Subtraction) _____ _____ _____ _____	Practice dividing your food into equal parts during today's meals (with your family's permission!)
--	---	---	--

Writing (Please write at least 4 complete sentences. There are extra lines on the back of this page.)

Write a prayer to Jesus. Let him take control of your worries for you. You can pray for yourself or for others.



Name _____

Week 7, Tuesday

Reading Log

Title	Time	Parent Initials

Math (Please show your work.)

Draw a picture using only 2-D shapes.	Make tally marks for each time you eat something today.	Write addition and subtraction problems with chalk.	Identify the time on the clock when your favorite show starts. _____	Make a tally mark each time someone says your name at lunch.
---------------------------------------	---	---	---	--

Writing (Please write at least 4 complete sentences. There are extra lines on the back of this page.)

Think of what makes your family special. Who are the members of your family? How do they help make your family unique?





Name _____

Week 7, Thursday

Reading Log

Title	Time	Parent Initials

Math (Please show your work.)

<p>Pick a number. What is one more? _____</p> <p>One less? _____</p> <p>Ten more? _____</p> <p>Ten less? _____</p>	<p>How many hours do you sleep at night? _____</p> <p>How many hours are you awake? _____</p> <p>Add the two sums together. How many hours are in your day? _____</p>	<p>Write five addition problems and solve.</p>
--	---	--

Writing (Please write at least 4 complete sentences. There are extra lines on the back of this page.)

Write down three words that stumped you while reading. Look them up, what do they mean?





Name _____

Week 8, Monday

Reading Log

Title	Time	Parent Initials

Math (Please show your work.)

$40+40=$ _____	Draw this number as tens and ones: 52	Draw this number as tens and ones: 100	I am a three-dimensional shape, my name rhymes with shone. What am I? _____ Try to draw it:	Count back from 50 while hopping on one foot. (Be careful)
$13+$ _____ $= 20$	$15-9=$ _____	$7+7+3=$ _____	$10+9+1=$ _____	Write your favorite number.

Writing (Please write at least 4 complete sentences. There are extra lines on the back of this page.)

Write about the Holy Spirit. What do you know about it? What are curious about?



Name _____

Week 8, Tuesday

Reading Log

Title	Time	Parent Initials

Math

Practice i-Ready or IXL for 15 minutes.

Writing (Please write at least 4 complete sentences. There are extra lines on the back of this page.)

What do you think some of the 2nd grade rules might be? What do you think a rule in 2nd grade should be? Convince me why this should be added to the rules list.



Name _____

Week 8, Wednesday

Reading Log

Title	Time	Parent Initials

Math (Please show your work.)

Play outside for 15 minutes each day this week. How many minutes were you playing in all?

Writing (Please write at least 4 complete sentences. There are extra lines on the back of this page.)

What do you do to serve others? How does this help the greater community?



Name _____

Week 8, Thursday

Reading Log

Title	Time	Parent Initials

Math

<p>Count the number of days until school starts.</p> <p>How many days are left of summer?</p> <p>_____</p>	<p>Do jumping jacks for 1 minute, skip for 3 minutes, and tiptoe for 2 minutes.</p> <p>How many minutes were you exercising for?</p> <p>_____</p>	<p>How many pencils do you need for school this year?</p> <p>_____</p> <p>Draw as tens and ones.</p>	<p>How many crayons do you need for school this year?</p> <p>_____</p> <p>Draw as tens and ones.</p>	<p>Which school supply do you need the least of?</p> <p>_____</p> <p>Which school supply do you need the most of?</p> <p>_____</p>
--	---	--	--	--

Writing (Please write at least 4 complete sentences. There are extra lines on the back of this page.)

This is a free writing day! Write about any school-appropriate topic.



Name _____

Week 8, Friday

Reading Log

Title	Time	Parent Initials

Math (Please show your work.)

<p>Write 5 subtraction problems. Don't forget to solve them!</p>	<p>Thank your family 5 times for providing you with school supplies. Record their smiles here:</p>
--	--

Writing (Please write at least 4 complete sentences. There are extra lines on the back of this page.)

Look back in your homework to past Friday writings. Have you achieved your goals? What would you like to do differently? What did you do that made you successful?

