


Rising 1st to 2nd Graders



July Packet
Literacy

Name _____



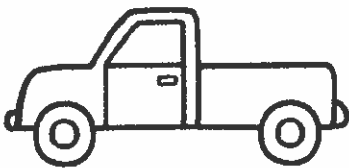




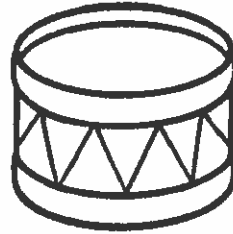

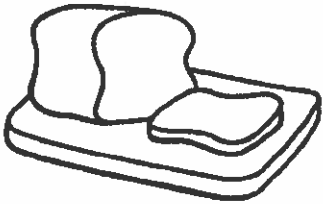

July Day 1

R and L Blends

Directions: Say the name of each picture.


Write the word on the line.

Circle the beginning blend for each word.




Name: _____

Directions: Write and sort the words based on their long and short vowel sounds.



Shady Vowels



Long Vowel

Short Vowel

Handwriting practice area for Long Vowel words. It features a grid of 10 rows. Each row consists of a solid top line, a dashed middle line, and a solid bottom line.

Handwriting practice area for Short Vowel words. It features a grid of 10 rows. Each row consists of a solid top line, a dashed middle line, and a solid bottom line.

feet cake hum fed smore
 fun him snake mute bite
 like cat ram not

Name _____

Summer Vowels



Directions: Read the words below. Color the long vowel words green. Color the short vowel words red.

stop	leap	mug	sun	sled	lake
smile	bone	pill	beach	ran	tile
stay	rule	stain	sail	rule	shine
cat	tie	bite	still	boat	chin

Directions: Write three sentences using the words from the list above.

1.

2.

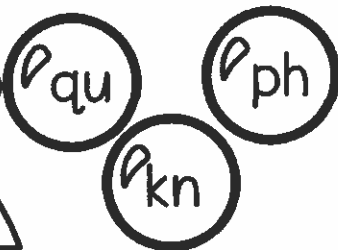

3.

Name: _____

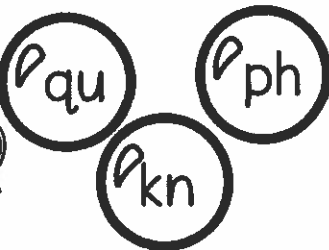
July Day 4

Directions: Color the bubble that has the correct digraph.
Write the correct digraph on the line.

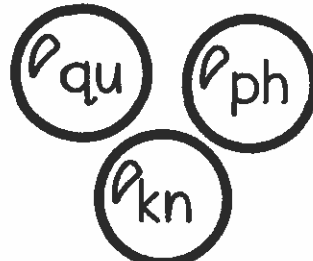
Swimming Digraphs



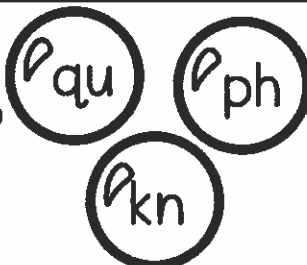
_____ een



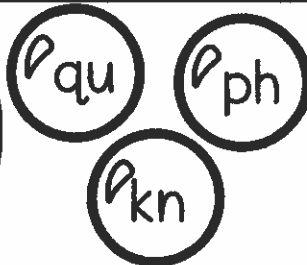

_____ ight



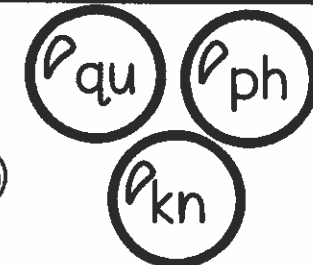
_____ estion



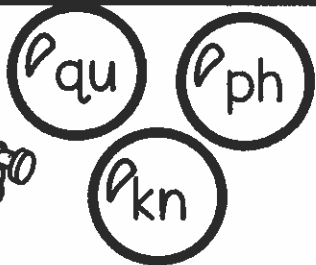
_____ one



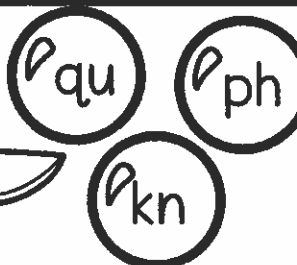
_____ ob



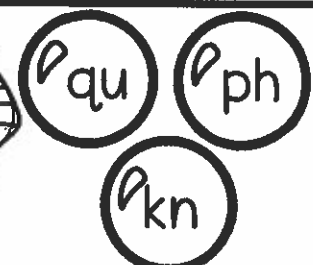
dol_____ in



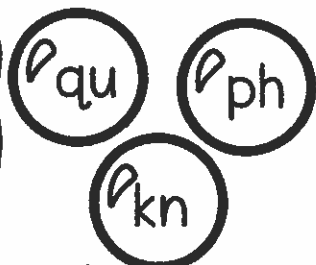
_____ it



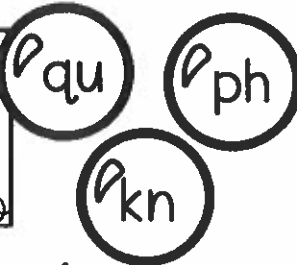

_____ ife



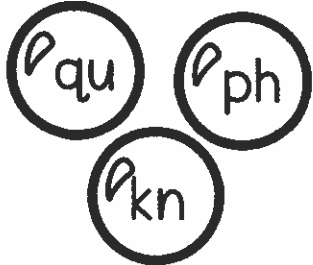
_____ arao h



_____ ilt




_____ oto



_____ ail

Name: _____


Directions: Color the watermelon that has the correct beginning digraphs.
Write the correct beginning digraph on the line.





Beginning Digraphs



_____ eath



_____ ale





_____ eel



_____ isper




_____ ench




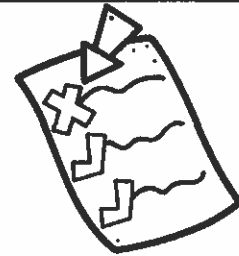
_____ isker



_____ ite



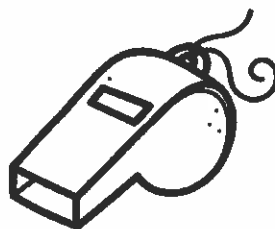
_____ isk




_____ ong



_____ ist




_____ istle



_____ ap

July Day 6

Celebrating the 4th




Name _____

EDITING CHECKLIST


Writing Title: _____



I wrote using neat handwriting, with spacing.




I have a capital letter at the beginning of each sentence.



I used punctuation at the end of each sentence.



I spelled words correctly.



I wrote using complete sentences.



I re-read my writing and made changes to make it even better.

Name: _____

Directions: Write 5 simple sentences using a word/phrase from each column. Use each word/phrase only once.

Summer Sentences



Who	Verb	Adjective	What
I	grabbed	on the huge	towel
The crab	sang	a fluffy	songs
A boy	surfed	a snappy	turtle
Friends	wanted	a scared	waves
The girl	saw	campfire	snail

.....

.....

2

.....

9

.....

4


.....

5


.....

Name: _____


Directions: Read the "or" words. Circle and write the correct word for each picture.



Beach Sp "or" t



horn
horse



sport
score




corn
cord




cork
pork



smore
snore



short
sort



fork
fort



sword
sworn



word
work



porch
torch




storm
stork




horde
horn

Name: _____


Directions: Read the "ar" words. Circle and write the correct word for each picture.




Collecting Star's




star
scar



dark
park




smart
start



spark
shark




harp
harm



bar
jar




carp
cart




car
tar




art
ark



yarn
yard



war
far




bark
barn

July Day 12

Name: _____


Directions: Read the "ur" words. Circle and write the correct word for each picture.



S^{ur}f UP!




nurse
curse



fur
purr




surf
burp




turn
burp




burst
slurp




spur
burn



turtle
turkey




burner
burger



curb
curl



churn
church




purse
purge




hurt
hurl

Name: _____

Directions: Read the "ir" words. Circle and write the correct word for each picture.



Shoveling d^{ir}ir^t



shirt
shrimp

.....




smir
stir

.....



first
firth

.....




bird
birth

.....




thirty
third

.....



sir
fir

.....




dirk
dirt

.....



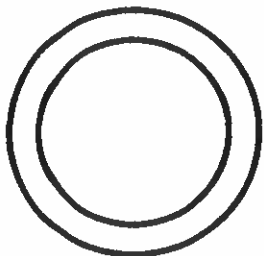
thirst
thirt

.....



cirus
circus

.....




circle
cirtle

.....



girl
girth

.....



spirt
skirt


.....

Name: _____


July Day 14

Building Contractions


Directions: Combine the two words to make a contraction. Write the contraction on the line.




.....




.....




.....




.....




.....




.....




.....




.....




.....



.....



.....



.....

Name: _____

Summer Book Review

Title _____

Author _____

Illustrator _____

Draw Setting

Draw Character

.....

.....

Problem and Solution

.....


.....

.....

.....

.....

Rising 1st to 2nd Graders




July Packet

Math

Bears in the Camp!

Directions: Read the statements at the bottom of the page.
Write the correct number for each set.



1. Four groups of ten and five ones =
2. Eight groups of ten and nine ones =
3. Seven groups of ten and three ones =
4. Nine groups of ten and nine ones =
5. Six groups of ten and two ones =
6. Five groups of ten and five ones =
7. Three groups of ten and eight ones =
8. One group of ten and zero ones =

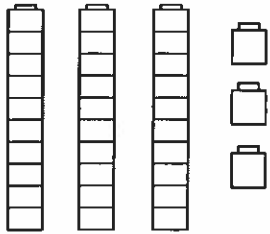

Name: _____

#6

July Day 2

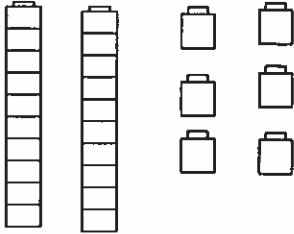
Directions: Count the tens and ones block and fill in the blank.

TENS and ONES



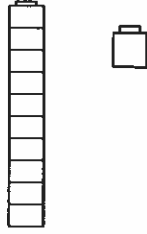
3 tens 3 ones

30 + 3 = 33



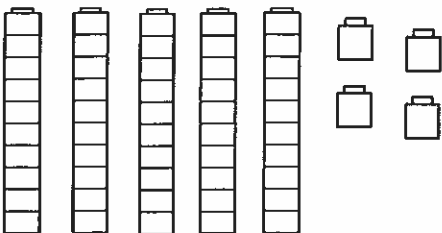
___ tens ___ ones

___ + ___ = ___



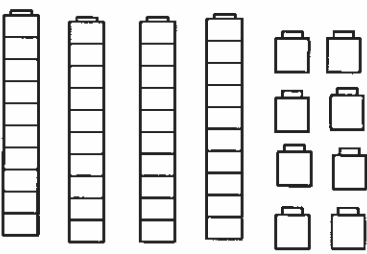
___ tens ___ ones

___ + ___ = ___



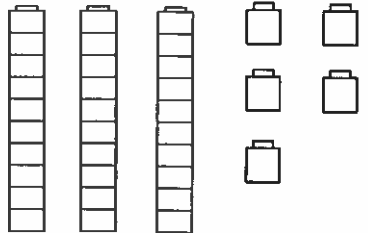
___ tens ___ ones

___ + ___ = ___



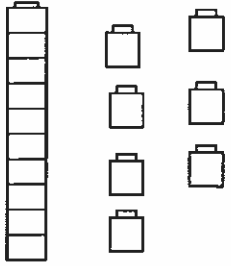
___ tens ___ ones

___ + ___ = ___



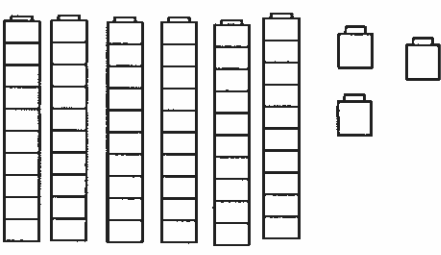
___ tens ___ ones

___ + ___ = ___



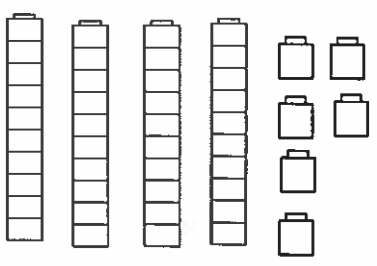
___ tens ___ ones

___ + ___ = ___



___ tens ___ ones

___ + ___ = ___



___ tens ___ ones

___ + ___ = ___

Name: _____







Directions: Mentally solve ten more or ten less of a number.

July Day 3









MORE Fruits, LESS Fruits

10 LESS 10 MORE

10 LESS 10 MORE

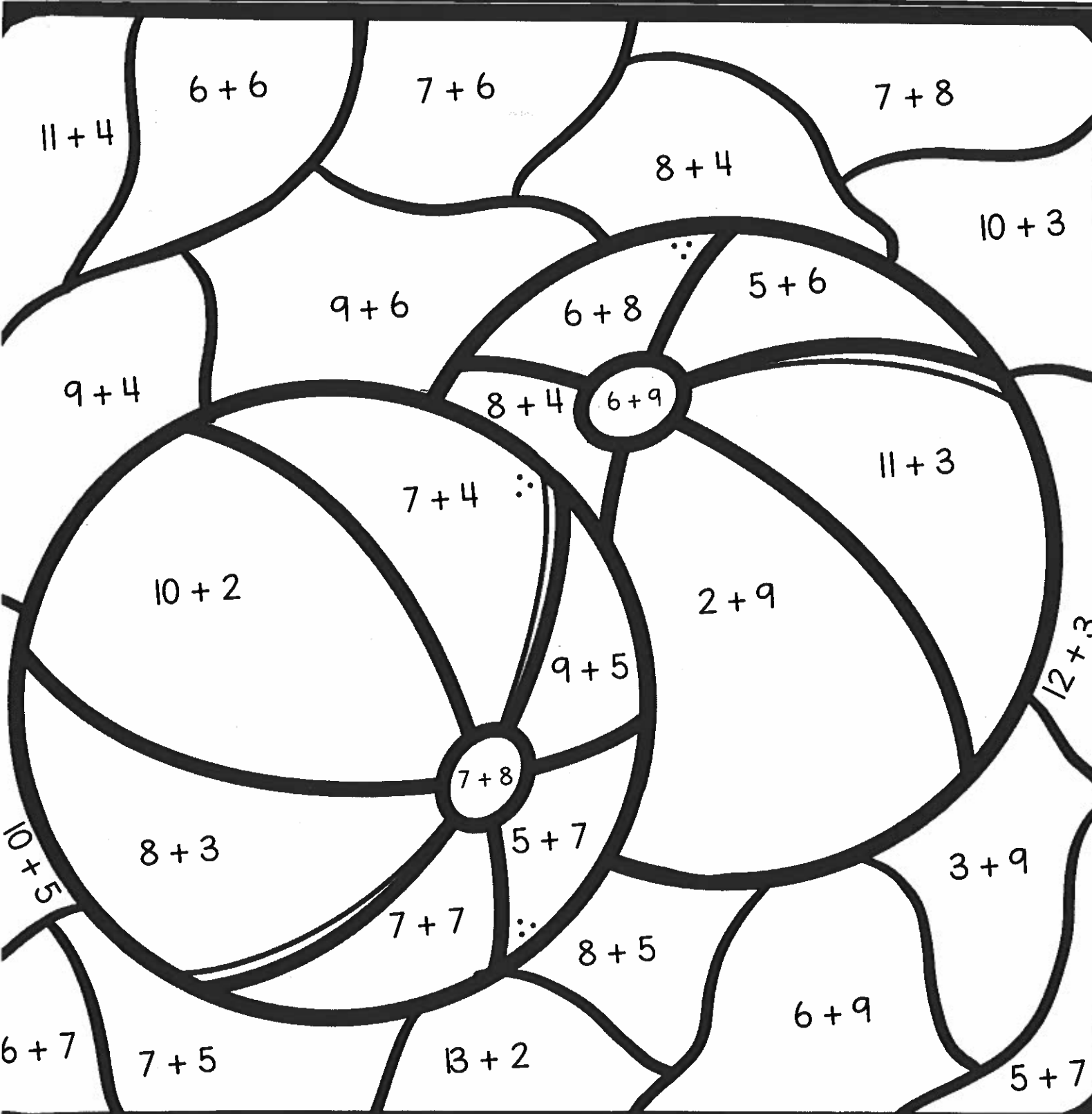
July Day 4

Name: _____


Direction: Find the sum of each number sentence. Then, use the color key to color the picture.

Beach FUN

pink 11	yellow 12	green 13	red 14	orange 15
------------	--------------	-------------	-----------	--------------



July Day 5



Name: _____

Directions: Solve and find the sum of all three addends.

LAY in the Summer SUN

$$\begin{array}{r} 6 \\ 5 \\ + 4 \\ \hline \end{array}$$

$$\begin{array}{r} 1 \\ 7 \\ + 3 \\ \hline \end{array}$$

$$\begin{array}{r} 3 \\ 2 \\ + 8 \\ \hline \end{array}$$

$$\begin{array}{r} 5 \\ 5 \\ + 1 \\ \hline \end{array}$$

$$\begin{array}{r} 3 \\ 9 \\ + 2 \\ \hline \end{array}$$

$$\begin{array}{r} 4 \\ 7 \\ + 2 \\ \hline \end{array}$$

$$\begin{array}{r} 6 \\ 8 \\ + 1 \\ \hline \end{array}$$

$$\begin{array}{r} 2 \\ 3 \\ + 4 \\ \hline \end{array}$$

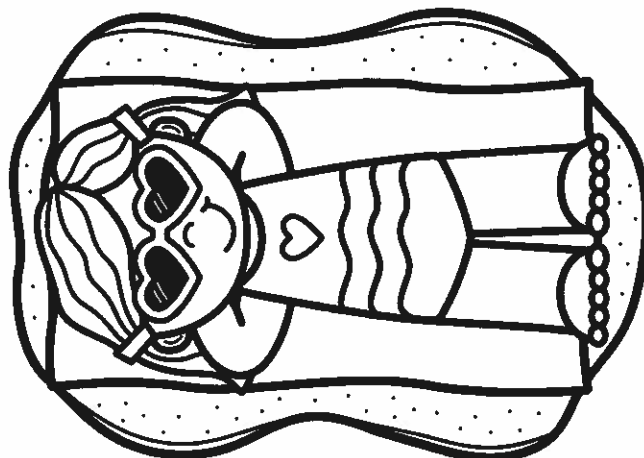
$$\begin{array}{r} 3 \\ 6 \\ + 5 \\ \hline \end{array}$$

$$\begin{array}{r} 2 \\ 9 \\ + 1 \\ \hline \end{array}$$

$$\begin{array}{r} 7 \\ 3 \\ + 2 \\ \hline \end{array}$$

$$\begin{array}{r} 8 \\ 4 \\ + 5 \\ \hline \end{array}$$

$$\begin{array}{r} 7 \\ 6 \\ + 5 \\ \hline \end{array}$$



Name _____

July Day 6



Summer Fact Families


Directions: Use the 3 numbers to write 4 different facts.




$14 + 6 = 20$
$6 + 14 = 20$
$20 - 14 = 6$
$20 - 6 = 14$




$\underline{\quad} + \underline{\quad} = \underline{\quad}$
$\underline{\quad} + \underline{\quad} = \underline{\quad}$
$\underline{\quad} - \underline{\quad} = \underline{\quad}$
$\underline{\quad} - \underline{\quad} = \underline{\quad}$




$\underline{\quad} + \underline{\quad} = \underline{\quad}$
$\underline{\quad} + \underline{\quad} = \underline{\quad}$
$\underline{\quad} - \underline{\quad} = \underline{\quad}$
$\underline{\quad} - \underline{\quad} = \underline{\quad}$



$\underline{\quad} + \underline{\quad} = \underline{\quad}$
$\underline{\quad} + \underline{\quad} = \underline{\quad}$
$\underline{\quad} - \underline{\quad} = \underline{\quad}$
$\underline{\quad} - \underline{\quad} = \underline{\quad}$



$\underline{\quad} + \underline{\quad} = \underline{\quad}$
$\underline{\quad} + \underline{\quad} = \underline{\quad}$
$\underline{\quad} - \underline{\quad} = \underline{\quad}$
$\underline{\quad} - \underline{\quad} = \underline{\quad}$



$\underline{\quad} + \underline{\quad} = \underline{\quad}$
$\underline{\quad} + \underline{\quad} = \underline{\quad}$
$\underline{\quad} - \underline{\quad} = \underline{\quad}$
$\underline{\quad} - \underline{\quad} = \underline{\quad}$

Name: _____

July Day 7

Directions: Solve the sum of the double-digit number sentences.

Double Digit Popsicles

$$\begin{array}{r} 38 \\ + 21 \\ \hline \end{array}$$

$$\begin{array}{r} 26 \\ + 43 \\ \hline \end{array}$$

$$\begin{array}{r} 13 \\ + 44 \\ \hline \end{array}$$

$$\begin{array}{r} 57 \\ + 22 \\ \hline \end{array}$$

$$\begin{array}{r} 32 \\ + 34 \\ \hline \end{array}$$

$$\begin{array}{r} 63 \\ + 24 \\ \hline \end{array}$$

$$\begin{array}{r} 41 \\ + 23 \\ \hline \end{array}$$

$$\begin{array}{r} 19 \\ + 60 \\ \hline \end{array}$$

$$\begin{array}{r} 23 \\ + 76 \\ \hline \end{array}$$

$$\begin{array}{r} 41 \\ + 28 \\ \hline \end{array}$$

$$\begin{array}{r} 32 \\ + 57 \\ \hline \end{array}$$

$$\begin{array}{r} 42 \\ + 46 \\ \hline \end{array}$$


$$\begin{array}{r} 35 \\ + 54 \\ \hline \end{array}$$

$$\begin{array}{r} 10 \\ + 27 \\ \hline \end{array}$$

$$\begin{array}{r} 57 \\ + 22 \\ \hline \end{array}$$

Name: _____

July Day 8



Directions: Solve each number sentence by finding the difference.

SUMMER Subtraction Math Facts



$11 - 3 = \underline{\quad}$

$15 - 7 = \underline{\quad}$

$8 - 2 = \underline{\quad}$

$16 - 9 = \underline{\quad}$

$10 - 3 = \underline{\quad}$

$7 - 3 = \underline{\quad}$

$12 - 9 = \underline{\quad}$

$4 - 3 = \underline{\quad}$

$9 - 9 = \underline{\quad}$

$17 - 9 = \underline{\quad}$

$8 - 4 = \underline{\quad}$

$9 - 8 = \underline{\quad}$

$13 - 2 = \underline{\quad}$

$6 - 1 = \underline{\quad}$

$13 - 7 = \underline{\quad}$

$11 - 2 = \underline{\quad}$

$12 - 3 = \underline{\quad}$

$14 - 2 = \underline{\quad}$

$2 - 0 = \underline{\quad}$

$3 - 1 = \underline{\quad}$

Name _____

Make a Math Sentence

Directions: Add +, - and = between the numbers to make true facts.



5 <input type="text"/> 7 <input type="text"/> 12	4 <input type="text"/> 4 <input type="text"/> 8
10 <input type="text"/> 4 <input type="text"/> 6	6 <input type="text"/> 9 <input type="text"/> 15
15 <input type="text"/> 8 <input type="text"/> 7	11 <input type="text"/> 6 <input type="text"/> 5
6 <input type="text"/> 6 <input type="text"/> 12	10 <input type="text"/> 7 <input type="text"/> 3
10 <input type="text"/> 5 <input type="text"/> 5	7 <input type="text"/> 5 <input type="text"/> 12
9 <input type="text"/> 2 <input type="text"/> 11	8 <input type="text"/> 8 <input type="text"/> 16
12 <input type="text"/> 7 <input type="text"/> 5	9 <input type="text"/> 2 <input type="text"/> 7
8 <input type="text"/> 4 <input type="text"/> 12	15 <input type="text"/> 10 <input type="text"/> 5
13 <input type="text"/> 4 <input type="text"/> 9	7 <input type="text"/> 3 <input type="text"/> 10
17 <input type="text"/> 8 <input type="text"/> 9	12 <input type="text"/> 4 <input type="text"/> 16



Name: _____

Directions: Determine missing number that makes each of the equations true.

Missing NUMBER

$4 + \square = 9$

$\square + 8 = 12$

$6 + 2 = \square$

$15 = 9 + \square$

$\square + 3 = 8$

$3 + \square = 7$

$11 = \square + 9$

$3 + 7 = \square$

$13 = 7 + \square$

$\square + 9 = 18$

$6 + \square = 13$

$\square + 7 = 14$

$4 + 9 = \square$

$6 = 4 + \square$

$\square + 8 = 17$

$3 + \square = 11$

Two digit addition (no regrouping)

Name: _____

July Day 11

$$\begin{array}{r} 15 \\ + 11 \\ \hline \end{array}$$

$$\begin{array}{r} 20 \\ + 14 \\ \hline \end{array}$$

$$\begin{array}{r} 36 \\ + 11 \\ \hline \end{array}$$

$$\begin{array}{r} 27 \\ + 22 \\ \hline \end{array}$$

$$\begin{array}{r} 34 \\ + 10 \\ \hline \end{array}$$

$$\begin{array}{r} 35 \\ + 24 \\ \hline \end{array}$$

$$\begin{array}{r} 26 \\ + 31 \\ \hline \end{array}$$

$$\begin{array}{r} 44 \\ + 25 \\ \hline \end{array}$$

$$\begin{array}{r} 57 \\ + 21 \\ \hline \end{array}$$

$$\begin{array}{r} 24 \\ + 41 \\ \hline \end{array}$$

$$\begin{array}{r} 42 \\ + 46 \\ \hline \end{array}$$

$$\begin{array}{r} 24 \\ + 35 \\ \hline \end{array}$$

$$\begin{array}{r} 71 \\ + 10 \\ \hline \end{array}$$

$$\begin{array}{r} 38 \\ + 21 \\ \hline \end{array}$$

$$\begin{array}{r} 54 \\ + 23 \\ \hline \end{array}$$

$$\begin{array}{r} 29 \\ + 20 \\ \hline \end{array}$$

$$\begin{array}{r} 58 \\ + 11 \\ \hline \end{array}$$

$$\begin{array}{r} 67 \\ + 22 \\ \hline \end{array}$$

$$\begin{array}{r} 36 \\ + 32 \\ \hline \end{array}$$

$$\begin{array}{r} 68 \\ + 10 \\ \hline \end{array}$$

Name: _____

Date: _____

July Day 12

Addition with Regrouping

(mixed)

1

	1	3
+	6	7
	8	0

2

	1	6
+	1	5

3

	4	4
+	4	8

4

	8	1
+	1	9

5

	5	6
+	7	2

6

	3	7
+	6	7

7

	9	5
+	2	3

8

	1	8
+	2	4

9

	8	9
+	4	0

10

	4	5
+	5	6

11

	7	0
+	9	5

12

	5	9
+	6	3

13

	7	6
+	7	6

14

	5	6
+	6	5

15

	7	8
+	5	2

16

	8	4
+	9	1

17

	1	5
+	3	8

18

	7	5
+	3	2

19

	4	2
+	4	9

20

	9	0
+	9	0

Two digit addition (with regrouping)

Name: _____

Date: **July Day 13**

$$\begin{array}{r} 25 \\ + 38 \\ \hline \end{array}$$

$$\begin{array}{r} 41 \\ + 29 \\ \hline \end{array}$$

$$\begin{array}{r} 36 \\ + 46 \\ \hline \end{array}$$

$$\begin{array}{r} 54 \\ + 32 \\ \hline \end{array}$$

$$\begin{array}{r} 42 \\ + 28 \\ \hline \end{array}$$

$$\begin{array}{r} 17 \\ + 27 \\ \hline \end{array}$$

$$\begin{array}{r} 33 \\ + 18 \\ \hline \end{array}$$

$$\begin{array}{r} 47 \\ + 15 \\ \hline \end{array}$$

$$\begin{array}{r} 37 \\ + 26 \\ \hline \end{array}$$

$$\begin{array}{r} 34 \\ + 31 \\ \hline \end{array}$$

$$\begin{array}{r} 32 \\ + 42 \\ \hline \end{array}$$

$$\begin{array}{r} 14 \\ + 27 \\ \hline \end{array}$$

$$\begin{array}{r} 16 \\ + 51 \\ \hline \end{array}$$

$$\begin{array}{r} 14 \\ + 23 \\ \hline \end{array}$$

$$\begin{array}{r} 34 \\ + 37 \\ \hline \end{array}$$

$$\begin{array}{r} 39 \\ + 10 \\ \hline \end{array}$$

$$\begin{array}{r} 38 \\ + 21 \\ \hline \end{array}$$

$$\begin{array}{r} 34 \\ + 55 \\ \hline \end{array}$$

$$\begin{array}{r} 14 \\ + 29 \\ \hline \end{array}$$

$$\begin{array}{r} 77 \\ + 11 \\ \hline \end{array}$$

Double Digit Popsicles

Directions: Solve the 2 digit subtraction problems. No regrouping.

$$\begin{array}{r} 58 \\ - 32 \\ \hline \end{array}$$

$$\begin{array}{r} 69 \\ - 21 \\ \hline \end{array}$$

$$\begin{array}{r} 45 \\ - 20 \\ \hline \end{array}$$

$$\begin{array}{r} 87 \\ - 64 \\ \hline \end{array}$$

$$\begin{array}{r} 88 \\ - 26 \\ \hline \end{array}$$

$$\begin{array}{r} 65 \\ - 11 \\ \hline \end{array}$$

$$\begin{array}{r} 39 \\ - 10 \\ \hline \end{array}$$

$$\begin{array}{r} 56 \\ - 31 \\ \hline \end{array}$$

$$\begin{array}{r} 76 \\ - 15 \\ \hline \end{array}$$

$$\begin{array}{r} 99 \\ - 24 \\ \hline \end{array}$$

$$\begin{array}{r} 75 \\ - 22 \\ \hline \end{array}$$

$$\begin{array}{r} 93 \\ - 11 \\ \hline \end{array}$$

$$\begin{array}{r} 23 \\ - 12 \\ \hline \end{array}$$

$$\begin{array}{r} 44 \\ - 40 \\ \hline \end{array}$$

$$\begin{array}{r} 97 \\ - 77 \\ \hline \end{array}$$

$$\begin{array}{r} 45 \\ - 24 \\ \hline \end{array}$$

$$\begin{array}{r} 57 \\ - 35 \\ \hline \end{array}$$

$$\begin{array}{r} 46 \\ - 36 \\ \hline \end{array}$$

$$\begin{array}{r} 23 \\ - 22 \\ \hline \end{array}$$


$$\begin{array}{r} 69 \\ - 32 \\ \hline \end{array}$$

Name: _____

Directions: Read the word problems. Use what you know to solve them.


Summer Problems

Sam went swimming and saw 6 school of fish. Then, he saw 7 more. How many fish did Sam see altogether?




_____ fish

Kim collected 15 seashells at the beach. She gave 8 to her friend, Jane. How many seashells does Kim have left?



_____ seashells

Jane ate 10 slices of watermelons. She also ate 9 slices pineapples. How many slices of fruit did Jane eat?




_____ fruits

Greg bought 6 scoops of ice cream. Ned bought 5 scoops of ice cream. How many scoops of ice cream did they have altogether?




_____ scoops

Tim built 8 sandcastles in. A wave destroyed 3 of his sandcastles. How many sandcastles does Time have left?




_____ castles

Maria bought 13 lemons to make lemonade. She only used 10 of the lemons. How many lemons does Maria still have?



_____ lemons

Rising 1st to 2nd Graders



July Packet
Challenge Math

Base Ten Blocks

Count and write the number of blocks.



Number Writing

Write the number word and expanded form of each number. The first one is done for you.

Number	Number Word	Expanded Form
621	Six hundred twenty one	$600 + 20 + 1$
354		
988		
407		
516		
732		

Continue Counting by 5

July Day 3

Name: _____

Count up by 5 on each line and fill in the numbers as you do.

1. ← 35 — 40 — 45 — — — — — — — →

2. ← 63 — 68 — 73 — — — — — — — →

3. ← 46 — 51 — 56 — — — — — — — →

4. ← 94 — 99 — 104 — — — — — — — →

5. ← 21 — 26 — 31 — — — — — — — →

6. ← 83 — 88 — 93 — — — — — — — →

7. ← 70 — 75 — 80 — — — — — — — →

8. ← 80 — 85 — 90 — — — — — — — →

9. ← 7 — 12 — 17 — — — — — — — →

10. ← 19 — 24 — 29 — — — — — — — →

Comparing Numbers

Fill in the <, >, or = sign in each box.

$547 \square 552$

$324 \square 342$

$179 \square 182$

$414 \square 212$

$947 \square 857$

$151 \square 151$

$365 \square 356$

$874 \square 873$

$921 \square 931$

$808 \square 898$

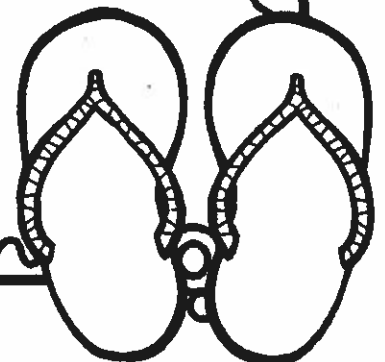
$109 \square 107$

$564 \square 546$

$784 \square 784$

$912 \square 812$

$326 \square 358$



Column Addition

July Day 5

Find each sum.

$$\begin{array}{r} 89 \\ 69 \\ 30 \\ + 87 \\ \hline \end{array}$$

$$\begin{array}{r} 39 \\ 18 \\ 81 \\ + 63 \\ \hline \end{array}$$

$$\begin{array}{r} 46 \\ 13 \\ 76 \\ + 45 \\ \hline \end{array}$$

$$\begin{array}{r} 70 \\ 34 \\ 55 \\ + 13 \\ \hline \end{array}$$

$$\begin{array}{r} 11 \\ 42 \\ 36 \\ + 69 \\ \hline \end{array}$$

$$\begin{array}{r} 82 \\ 76 \\ 89 \\ + 99 \\ \hline \end{array}$$

$$\begin{array}{r} 81 \\ 44 \\ 52 \\ + 29 \\ \hline \end{array}$$

$$\begin{array}{r} 49 \\ 59 \\ 56 \\ + 98 \\ \hline \end{array}$$

$$\begin{array}{r} 24 \\ 82 \\ 42 \\ + 26 \\ \hline \end{array}$$

$$\begin{array}{r} 54 \\ 13 \\ 96 \\ + 18 \\ \hline \end{array}$$

$$\begin{array}{r} 23 \\ 77 \\ 99 \\ + 16 \\ \hline \end{array}$$

$$\begin{array}{r} 17 \\ 27 \\ 49 \\ + 87 \\ \hline \end{array}$$

$$\begin{array}{r} 75 \\ 29 \\ 64 \\ + 74 \\ \hline \end{array}$$

$$\begin{array}{r} 86 \\ 98 \\ 95 \\ + 65 \\ \hline \end{array}$$

$$\begin{array}{r} 62 \\ 64 \\ 34 \\ + 70 \\ \hline \end{array}$$

$$\begin{array}{r} 33 \\ 44 \\ 86 \\ + 43 \\ \hline \end{array}$$

$$\begin{array}{r} 84 \\ 17 \\ 77 \\ + 71 \\ \hline \end{array}$$

$$\begin{array}{r} 36 \\ 24 \\ 95 \\ + 39 \\ \hline \end{array}$$

$$\begin{array}{r} 12 \\ 97 \\ 87 \\ + 42 \\ \hline \end{array}$$

$$\begin{array}{r} 96 \\ 40 \\ 65 \\ + 33 \\ \hline \end{array}$$

$$\begin{array}{r} 18 \\ 68 \\ 47 \\ + 70 \\ \hline \end{array}$$

$$\begin{array}{r} 88 \\ 26 \\ 76 \\ + 68 \\ \hline \end{array}$$

$$\begin{array}{r} 41 \\ 24 \\ 39 \\ + 26 \\ \hline \end{array}$$

$$\begin{array}{r} 75 \\ 43 \\ 33 \\ + 16 \\ \hline \end{array}$$

$$\begin{array}{r} 99 \\ 70 \\ 79 \\ + 21 \\ \hline \end{array}$$

Adding With NO Regrouping

July Day 6

Name: _____

Calculate each sum.

$$\begin{array}{r} 734 \\ + 243 \\ \hline \end{array}$$

$$\begin{array}{r} 736 \\ + 243 \\ \hline \end{array}$$

$$\begin{array}{r} 210 \\ + 364 \\ \hline \end{array}$$

$$\begin{array}{r} 525 \\ + 311 \\ \hline \end{array}$$

$$\begin{array}{r} 112 \\ + 417 \\ \hline \end{array}$$

$$\begin{array}{r} 320 \\ + 553 \\ \hline \end{array}$$

$$\begin{array}{r} 432 \\ + 560 \\ \hline \end{array}$$

$$\begin{array}{r} 114 \\ + 483 \\ \hline \end{array}$$

$$\begin{array}{r} 252 \\ + 247 \\ \hline \end{array}$$

$$\begin{array}{r} 420 \\ + 515 \\ \hline \end{array}$$

$$\begin{array}{r} 305 \\ + 410 \\ \hline \end{array}$$

$$\begin{array}{r} 330 \\ + 555 \\ \hline \end{array}$$

$$\begin{array}{r} 610 \\ + 358 \\ \hline \end{array}$$

$$\begin{array}{r} 104 \\ + 404 \\ \hline \end{array}$$

$$\begin{array}{r} 103 \\ + 844 \\ \hline \end{array}$$

$$\begin{array}{r} 352 \\ + 304 \\ \hline \end{array}$$

$$\begin{array}{r} 560 \\ + 234 \\ \hline \end{array}$$

$$\begin{array}{r} 581 \\ + 406 \\ \hline \end{array}$$

$$\begin{array}{r} 394 \\ + 105 \\ \hline \end{array}$$

$$\begin{array}{r} 151 \\ + 126 \\ \hline \end{array}$$

$$\begin{array}{r} 144 \\ + 700 \\ \hline \end{array}$$

$$\begin{array}{r} 441 \\ + 227 \\ \hline \end{array}$$

$$\begin{array}{r} 115 \\ + 630 \\ \hline \end{array}$$

$$\begin{array}{r} 122 \\ + 636 \\ \hline \end{array}$$

$$\begin{array}{r} 325 \\ + 250 \\ \hline \end{array}$$

Adding 3-Digit Numbers

July Day 7

Name: _____

Calculate each sum.

$$\begin{array}{r} 236 \\ + 260 \\ \hline \end{array}$$

$$\begin{array}{r} 151 \\ + 897 \\ \hline \end{array}$$

$$\begin{array}{r} 802 \\ + 776 \\ \hline \end{array}$$

$$\begin{array}{r} 180 \\ + 620 \\ \hline \end{array}$$

$$\begin{array}{r} 961 \\ + 649 \\ \hline \end{array}$$

$$\begin{array}{r} 553 \\ + 455 \\ \hline \end{array}$$

$$\begin{array}{r} 195 \\ + 666 \\ \hline \end{array}$$

$$\begin{array}{r} 501 \\ + 799 \\ \hline \end{array}$$

$$\begin{array}{r} 520 \\ + 287 \\ \hline \end{array}$$

$$\begin{array}{r} 240 \\ + 423 \\ \hline \end{array}$$

$$\begin{array}{r} 538 \\ + 943 \\ \hline \end{array}$$

$$\begin{array}{r} 586 \\ + 956 \\ \hline \end{array}$$

$$\begin{array}{r} 674 \\ + 662 \\ \hline \end{array}$$

$$\begin{array}{r} 984 \\ + 534 \\ \hline \end{array}$$

$$\begin{array}{r} 801 \\ + 990 \\ \hline \end{array}$$

$$\begin{array}{r} 632 \\ + 290 \\ \hline \end{array}$$

$$\begin{array}{r} 328 \\ + 310 \\ \hline \end{array}$$

$$\begin{array}{r} 669 \\ + 805 \\ \hline \end{array}$$

$$\begin{array}{r} 533 \\ + 323 \\ \hline \end{array}$$

$$\begin{array}{r} 988 \\ + 215 \\ \hline \end{array}$$

$$\begin{array}{r} 379 \\ + 233 \\ \hline \end{array}$$

$$\begin{array}{r} 379 \\ + 635 \\ \hline \end{array}$$

$$\begin{array}{r} 227 \\ + 820 \\ \hline \end{array}$$

$$\begin{array}{r} 508 \\ + 983 \\ \hline \end{array}$$

$$\begin{array}{r} 371 \\ + 311 \\ \hline \end{array}$$

Name: _____

Calculate each sum.

$802 + 62 =$

$748 + 52 =$

$849 + 29 =$

$342 + 18 =$

$925 + 32 =$

$339 + 30 =$

$112 + 75 =$

$815 + 52 =$

$156 + 71 =$

$769 + 68 =$

$832 + 97 =$

$899 + 39 =$

$988 + 71 =$

$282 + 50 =$

$265 + 87 =$

$195 + 17 =$

$932 + 69 =$

$510 + 68 =$

$662 + 77 =$

$324 + 85 =$

Name: _____

Date: _____

July Day 9

Subtraction with Regrouping

(mixed)

1

	5	11
	6	1
-	1	9
	4	2

2

	○	○
	2	0
-	1	8

3

	○	○
	8	1
-	1	3

4

	○	○
	5	3
-	3	5

5

	○	○
	5	0
-	1	1

6

	○	○
	3	4
-	2	7

7

	○	○
	7	2
-	1	4

8

	○	○
	4	1
-	2	2

9

	○	○
	6	2
-	2	7

10

	○	○
	4	1
-	3	8

11

	○	○
	2	4
-	1	5

12

	○	○
	3	4
-	2	6

13

	○	○
	8	1
-	1	6

14

	○	○
	5	0
-	3	9

15

	○	○
	6	2
-	1	7

16

	○	○
	7	0
-	2	1

17

	○	○
	7	2
-	5	5

18

	○	○
	6	7
-	3	9

19

	○	○
	5	1
-	3	4

20

	○	○
	9	5
-	5	8

Subtracting 3-Digit Numbers

July Day 10

Challenge

Name: _____

Calculate each difference.

$$\begin{array}{r} 797 \\ - 573 \\ \hline \end{array}$$

$$\begin{array}{r} 798 \\ - 703 \\ \hline \end{array}$$

$$\begin{array}{r} 952 \\ - 487 \\ \hline \end{array}$$

$$\begin{array}{r} 408 \\ - 192 \\ \hline \end{array}$$

$$\begin{array}{r} 302 \\ - 103 \\ \hline \end{array}$$

$$\begin{array}{r} 972 \\ - 284 \\ \hline \end{array}$$

$$\begin{array}{r} 769 \\ - 479 \\ \hline \end{array}$$

$$\begin{array}{r} 864 \\ - 181 \\ \hline \end{array}$$

$$\begin{array}{r} 960 \\ - 326 \\ \hline \end{array}$$

$$\begin{array}{r} 994 \\ - 431 \\ \hline \end{array}$$

$$\begin{array}{r} 747 \\ - 425 \\ \hline \end{array}$$

$$\begin{array}{r} 475 \\ - 467 \\ \hline \end{array}$$

$$\begin{array}{r} 535 \\ - 413 \\ \hline \end{array}$$

$$\begin{array}{r} 429 \\ - 340 \\ \hline \end{array}$$

$$\begin{array}{r} 724 \\ - 673 \\ \hline \end{array}$$

$$\begin{array}{r} 334 \\ - 124 \\ \hline \end{array}$$

$$\begin{array}{r} 601 \\ - 554 \\ \hline \end{array}$$

$$\begin{array}{r} 787 \\ - 646 \\ \hline \end{array}$$

$$\begin{array}{r} 953 \\ - 880 \\ \hline \end{array}$$

$$\begin{array}{r} 972 \\ - 943 \\ \hline \end{array}$$

Subtracting Across Zeros

July Day 11 Challenge

Name: _____

Calculate each difference.

$$\begin{array}{r} 800 \\ - 379 \\ \hline \end{array}$$

$$\begin{array}{r} 300 \\ - 248 \\ \hline \end{array}$$

$$\begin{array}{r} 900 \\ - 663 \\ \hline \end{array}$$

$$\begin{array}{r} 800 \\ - 59 \\ \hline \end{array}$$

$$\begin{array}{r} 800 \\ - 579 \\ \hline \end{array}$$

$$\begin{array}{r} 600 \\ - 417 \\ \hline \end{array}$$

$$\begin{array}{r} 700 \\ - 288 \\ \hline \end{array}$$

$$\begin{array}{r} 900 \\ - 105 \\ \hline \end{array}$$

$$\begin{array}{r} 800 \\ - 7 \\ \hline \end{array}$$

$$\begin{array}{r} 700 \\ - 597 \\ \hline \end{array}$$

$$\begin{array}{r} 400 \\ - 190 \\ \hline \end{array}$$

$$\begin{array}{r} 200 \\ - 176 \\ \hline \end{array}$$

$$\begin{array}{r} 600 \\ - 142 \\ \hline \end{array}$$

$$\begin{array}{r} 200 \\ - 137 \\ \hline \end{array}$$

$$\begin{array}{r} 500 \\ - 77 \\ \hline \end{array}$$

$$\begin{array}{r} 800 \\ - 62 \\ \hline \end{array}$$

$$\begin{array}{r} 300 \\ - 38 \\ \hline \end{array}$$

$$\begin{array}{r} 500 \\ - 174 \\ \hline \end{array}$$

$$\begin{array}{r} 600 \\ - 86 \\ \hline \end{array}$$

$$\begin{array}{r} 300 \\ - 132 \\ \hline \end{array}$$

$$\begin{array}{r} 500 \\ - 464 \\ \hline \end{array}$$

$$\begin{array}{r} 700 \\ - 430 \\ \hline \end{array}$$

$$\begin{array}{r} 700 \\ - 647 \\ \hline \end{array}$$

$$\begin{array}{r} 900 \\ - 642 \\ \hline \end{array}$$

$$\begin{array}{r} 400 \\ - 21 \\ \hline \end{array}$$

Name: _____

Challenge

Calculate each difference.

$$\begin{array}{r} 602 \\ - 371 \\ \hline \end{array}$$

$$\begin{array}{r} 705 \\ - 212 \\ \hline \end{array}$$

$$\begin{array}{r} 900 \\ - 882 \\ \hline \end{array}$$

$$\begin{array}{r} 202 \\ - 166 \\ \hline \end{array}$$

$$\begin{array}{r} 306 \\ - 219 \\ \hline \end{array}$$

$$\begin{array}{r} 404 \\ - 348 \\ \hline \end{array}$$

$$\begin{array}{r} 907 \\ - 566 \\ \hline \end{array}$$

$$\begin{array}{r} 302 \\ - 186 \\ \hline \end{array}$$

$$\begin{array}{r} 808 \\ - 537 \\ \hline \end{array}$$

$$\begin{array}{r} 403 \\ - 123 \\ \hline \end{array}$$

$$\begin{array}{r} 601 \\ - 418 \\ \hline \end{array}$$

$$\begin{array}{r} 507 \\ - 407 \\ \hline \end{array}$$

$$\begin{array}{r} 804 \\ - 712 \\ \hline \end{array}$$

$$\begin{array}{r} 208 \\ - 127 \\ \hline \end{array}$$

$$\begin{array}{r} 408 \\ - 337 \\ \hline \end{array}$$

$$\begin{array}{r} 507 \\ - 463 \\ \hline \end{array}$$

$$\begin{array}{r} 507 \\ - 298 \\ \hline \end{array}$$

$$\begin{array}{r} 905 \\ - 862 \\ \hline \end{array}$$

$$\begin{array}{r} 405 \\ - 124 \\ \hline \end{array}$$

$$\begin{array}{r} 408 \\ - 262 \\ \hline \end{array}$$

$$\begin{array}{r} 907 \\ - 658 \\ \hline \end{array}$$

$$\begin{array}{r} 207 \\ - 123 \\ \hline \end{array}$$

$$\begin{array}{r} 802 \\ - 764 \\ \hline \end{array}$$

$$\begin{array}{r} 701 \\ - 654 \\ \hline \end{array}$$

$$\begin{array}{r} 806 \\ - 200 \\ \hline \end{array}$$

Lemonade Stand Word Problems



Solve each problem. Show your work.

I had \$30 and spent \$13 on supplies to make lemonade. Then, I earned \$18 selling lemonade. How much money did I end up with?

A glass of lemonade costs \$1.25. If I have two quarters, three dimes, and six nickels, do I have enough to buy a glass? Why or why not?

The lemonade stand sold 31 glasses of lemonade on Saturday and 45 glasses of lemonade on Sunday. How many more glasses of lemonade were sold on Sunday?

Keisha made \$37 at the lemonade stand last week and wants to have \$50 to go to the amusement park. How much more money does she need to make?



A Day at the Beach Word Problems

Solve each problem. Show your work.


If there were 67 people at the beach on Friday, 89 on Saturday, and 105 on Sunday, how many people were there altogether on those three days?

Lake Bonita is 67 miles away from Mark's house, and the ocean is 89 miles away from his house. How much farther is the ocean than Lake Bonita from Mark's house?

Parking at the beach costs \$5.75. If I have a five dollar bill, four dimes, a nickel, and a quarter, do I have enough money to park? Why or why not?

The Smith family had \$85 when they arrived at the beach and \$64 when they left. How much money did they spend at the beach?

Picnic Fun Word Problems



Solve each problem. Show your work.

The Sanchez family spent \$15 on drinks, \$28 on food, and \$6 on paper plates and cups. How much money did they spend altogether?

There were 35 people at the neighborhood picnic. Then, 27 more people came. A little while later, 13 people left. How many people are at the picnic now?

In the watermelon seed spitting contest, Greg spit a seed 34 inches. Sandy spit a seed 39 inches. How many inches did Sandy win by?

I want to buy a new picnic basket that costs \$8.50. If I pay with a \$10 bill, how much change will I get back?